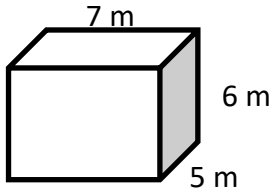


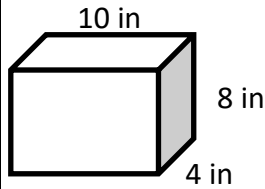
Rectangular Prism

 Find the volume of each Rectangular Prism.

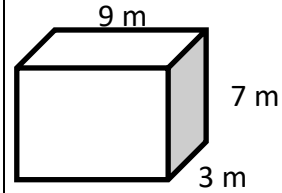
1)



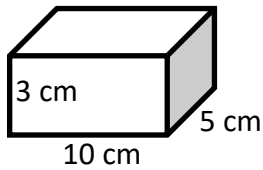
2)



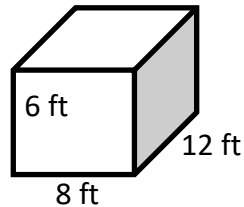
3)



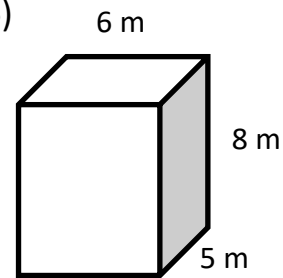
4)



5)

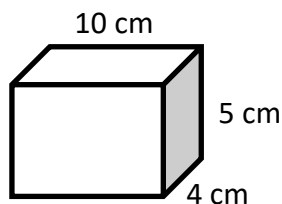


6)

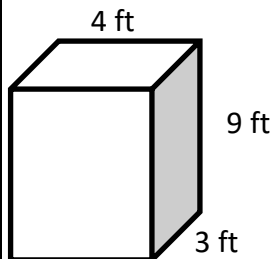


 Find the surface area of each Rectangular Prism.

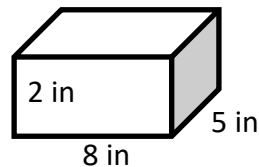
7)



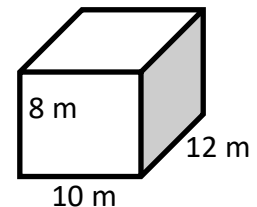
8)



9)



10)



Answers***Rectangular Prism***

1) $210 m^3$

2) $320 in^3$

3) $189 m^3$

4) $150 cm^3$

5) $576 ft^3$

6) $240 m^3$

7) $220 cm^2$

8) $150 ft^2$

9) $132 in^2$

10) $592 m^2$

