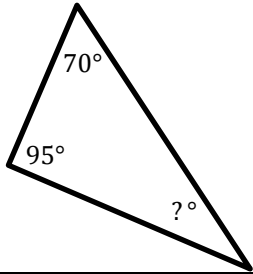


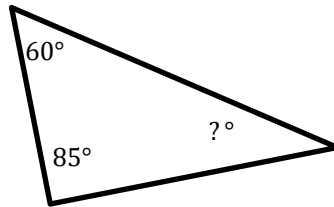
Triangles

 Find the measure of the unknown angle in each triangle.

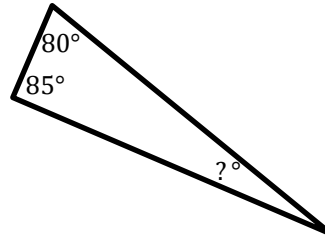
1)



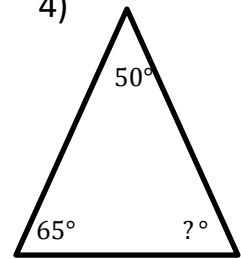
2)



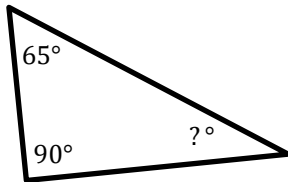
3)



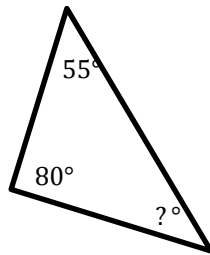
4)



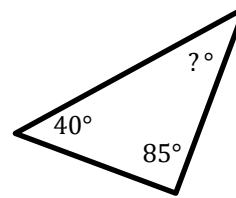
5)



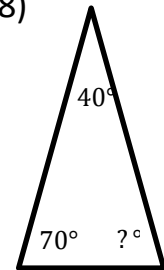
6)



7)

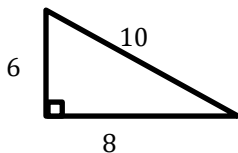


8)

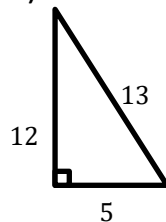


 Find area of each triangle.

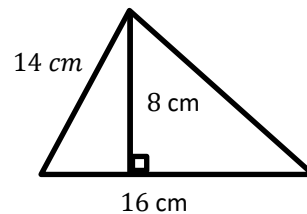
9)



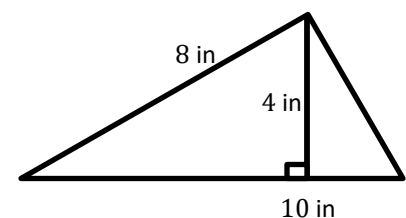
10)



11)



12)





Answers

Triangles

- 1) 15°
- 2) 35°
- 3) 15°
- 4) 65°

- 5) 25°
- 6) 45°
- 7) 55°
- 8) 70°

- 9) *24 square unites*
- 10) *30 square unites*
- 11) *64 square unites*
- 12) *20 square unites*