


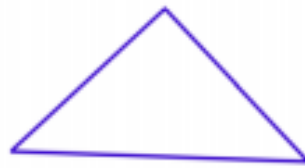
Classify Triangles

Classify the triangles by their sides and angles.

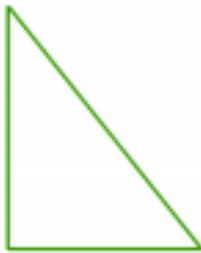
1)




2)




3)



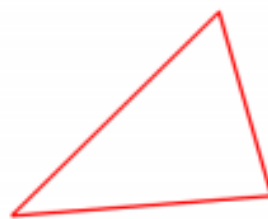
4)



5)



6)





Math Worksheet

Name: _____

Date: _____

Answers

- 1) Scalene, obtuse
- 2) Isosceles, right
- 3) Scalene, right
- 4) Equilateral, acute
- 5) Scalene, acute
- 6) Scalene, acute