






## Coins

1. Count the coins in each box, and write it.

	_____
	_____
	_____
	_____



2. Ella had 10 coins in his bank. He spent 6 of her coins. How many coins does she have now?

\_\_\_\_\_ coins



3. Write the name of each coin.



\_\_\_\_\_




\_\_\_\_\_



\_\_\_\_\_



\_\_\_\_\_



4. Emily had 12 coins in his bank.  
He spent 4 of her coins. How  
many coins does she have now?

\_\_\_\_\_ coins