



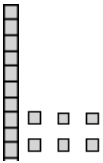
Counting


1. Find the missing number in each counting sequence.


a) 1, 2, 3, 4, ____, 6, 7, 8, 9, 10.

b) 11, 12, ____, 14, 15, 16, 17.

2. Count and write the number shown.









3. Write what numbers come next.

a) 11, 12, 13, 14, 15, ____, ____, ____, ____.

b) 3, 4, 5, 6, 7, ____, ____, ____, ____.

c) 20, 21, 22, 23, 24, ____, ____, ____, ____.

d) 29, 30, 31, 32, 33, ____, ____, ____, ____.

e) 38, 39, 40, 41, 42, ____, ____, ____, ____.

f) 47, 48, 49, 50, 51, ____, ____, ____, ____.

4. Count and write the number shown.

