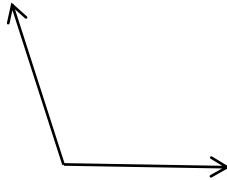



Identifying Angles: Acute, Right, Obtuse, and Straight Angles

 Write the name of the angles.

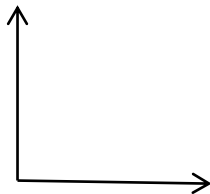
1)



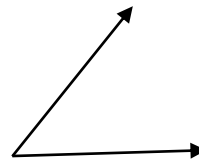
2)



3)



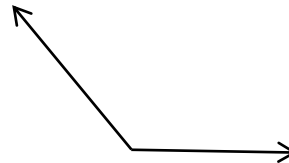
4)



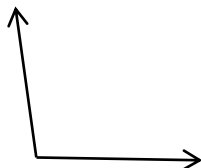
5)



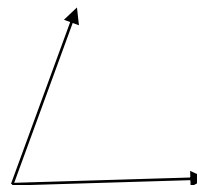
6)



7)



8)





Answers

- 1) Obtuse
- 2) Acute
- 3) Right

- 4) Acute
- 5) Straight
- 6) Obtuse

- 7) Obtuse
- 8) Acute