


Line Segments

 Write each as a line, ray or line segment.

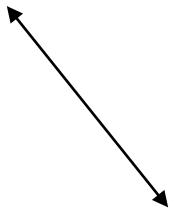
1)



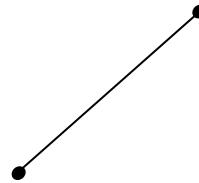
2)



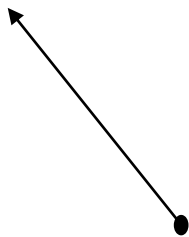
3)



4)



5)




6)



7)



8)





Answers

- 1) Line segment
- 2) Ray
- 3) Line
- 4) Line segment
- 5) Ray
- 6) Line
- 7) Line
- 8) Line segment