



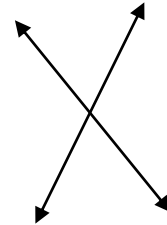
**Parallel, Perpendicular and Intersecting Lines**

 *State whether the given pair of lines are parallel, perpendicular, or intersecting.*

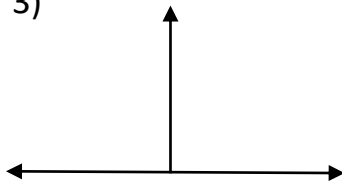
1)




2)



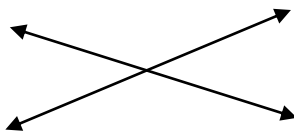
3)



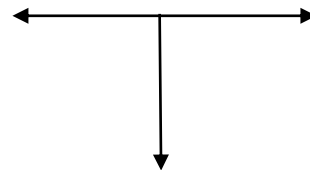
4)



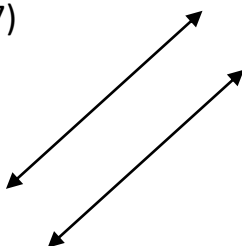
5)



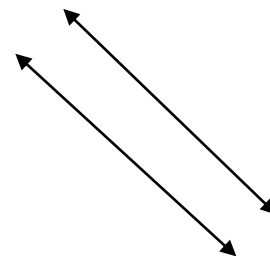
6)



7)



8)





## Answers

- |                  |                  |
|------------------|------------------|
| 1) Parallel      | 5) Intersection  |
| 2) Intersection  | 6) Perpendicular |
| 3) Perpendicular | 7) Parallel      |
| 4) Parallel      | 8) Parallel      |