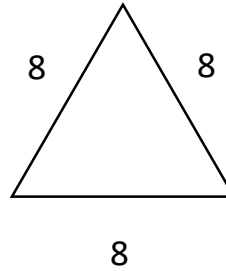


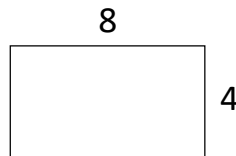


Perimeter

1. What is the perimeter of the shape? _____



2. What is the perimeter of the rectangle? _____



3. What is the perimeter of the square? _____

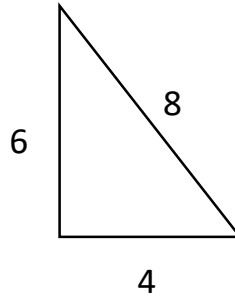




Name: _____

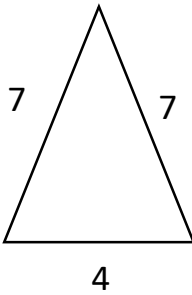
Date: _____

4. What is the perimeter of the shape?

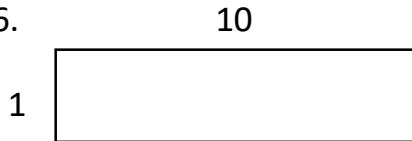


What is the perimeter of the shapes?

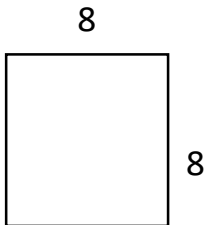
5.



6.



7.



8.

