



**Polygon Names** *Write name of polygons.*

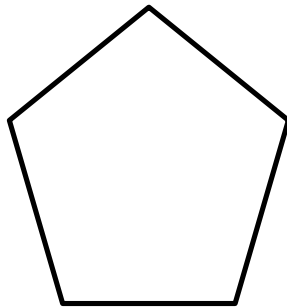
1)



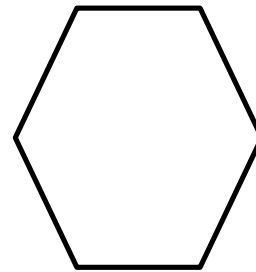
2)



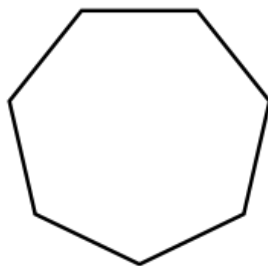
3)



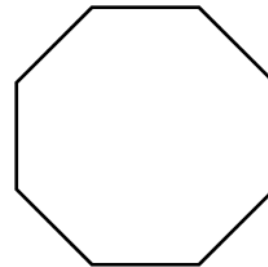
4)



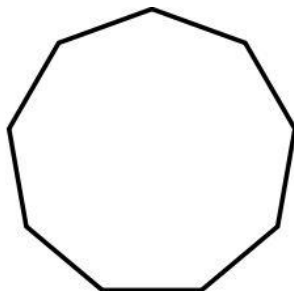
5)



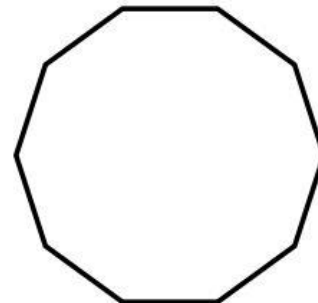
6)



7)



8)





## Answers

- |                  |             |
|------------------|-------------|
| 1) Triangle      | 5) Heptagon |
| 2) Quadrilateral | 6) Octagon  |
| 3) Pentagon      | 7) Nonagon  |
| 4) Hexagon       | 8) Decagon  |