




## Symmetry

Is this a line of symmetry?


1. Yes

No



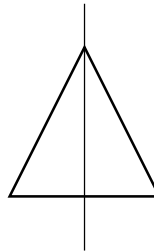
2. Yes

No

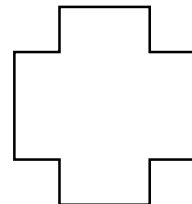
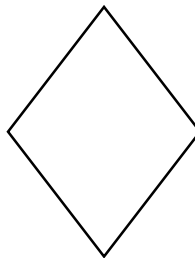



3. Yes

No



4. Draw line of symmetry for each shape.





5. Circle the shapes that are not symmetrical.

